



Dear Parents,

- Long awaited Summer Holidays have commenced. It is a time to relax, rejuvenate, refresh and regain health. It is also a time to reduce stress & increase productivity.
- Spend quality time with your kids and inculcate values.
- Help and guide your ward in doing Holiday Homework.
- Encourage your ward to converse in English.
- Do some kind of physical exercises with your kids.
- Read the Newspaper every day and encourage your ward to do so.

BE HAEALTHY, BE HAPPY






Regards

GTB 011- 46575555




Worksheet 1Subject: EnglishClass: IName: _____

Q1. Write the sound each animal makes.

1. 	
2. 	
3. 	
4 	
5 	

6



7



Q2. Punctuate the following sentences using capital letters and full stop.

1. raja lives in punjab

2. i love to read books

3. you look pretty

4. she is a nice girl

5. ducks swim in water

6. he goes to school

Q3. Fill in the blanks with double letter words (oo, ll, ee)

1. b a _ _ o o n.

2. l _ _ _ k

3. t r _ _

4. d o _ _ _

5. s h _ _ _ p

6. t a _ _ _

7. b _ _ _ k

8. s c h _ _ _ l

9. b e _ _ _

10. c _ _ _ l

Q4. Who said these words. (Refer- Lesson: The Mango Tree)

1. Yes it is very cool here!

Ans _____

2. Hey, that mango is about to fall Catch it!

Ans _____

3. What fun it is to play here!

Ans _____

4. It will give us fruits.

Ans _____

Worksheet 1Subject: HindiClass: I

Name: _____

Page | 1

कार्य पत्रिका 1

विषय -- हिंदी

कक्षा - प्रथम

नाम _____ कक्षा वर्ग _____ दिनांक _____

प्रश्न 1: नीचे दिए खाली स्थान में इ व ई की मात्रा के शब्द लिख कर खाली स्थान भरो

चि यातित बा शधर  सानन  ठाईसी  मान

प्रश्न 2: चित्र मिलान करो

1 अखबार

2 छिलका

3 पहिया

4 महल

5 गाजर

6 हलवा

7 उपहार

8 आम



प्रश्न 3: खाली स्थान भरकर वाक्य पूरे करो :

राधा पढ़ ।



..... का शिकार मत कर ।



..... चला ।



..... इधर रख ।



राधा..... मत पकड़ ।



..... खाट पर रख ।



प्रश्न 4: सब्जियों के नाम लिखो:

1 _____

4 _____

2 _____

5 _____

3 _____

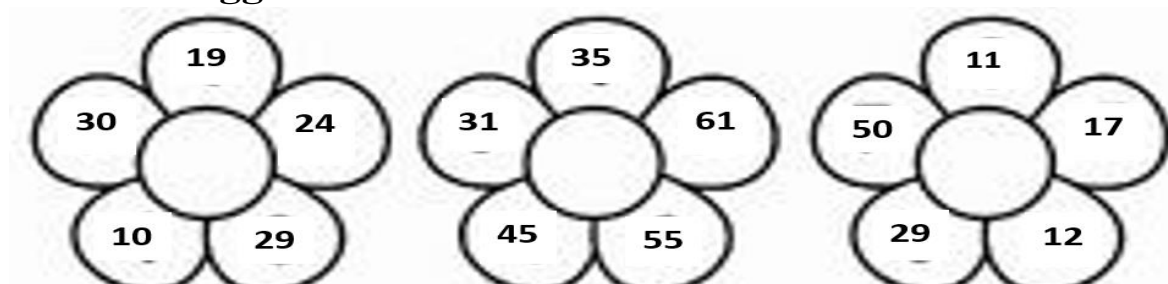
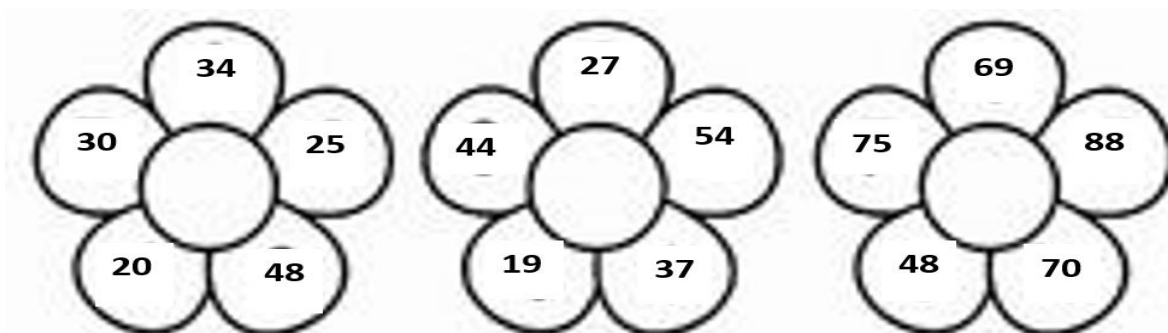

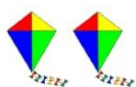
6 _____

प्रश्न 5: नीचे दिए वर्णों को जोड़ कर नए शब्द बनाओ:

ज + ल =	त + त + ल + त =
व + स =	क + त + म =
घ + र =	छ + त + त + त =
फ + ल =	स + त + न + त =
ज + ब =	ब + त + ज + त =
म + ट + र =	नि + ह + र + न =
व + त + ख =	नि + ग + न =
ब + ट + न =	नि + स + या + र =
म + ह + ल =	नि + च + नि + ड + या =
क + म + ल =	नि + म + ला =
क + स + र + त =	म + छ + ल + ती =
श + ल + ग + म =	सू + ती + ल =
श + र + व + त =	स + ती + ट + ती =
थ + र + म + स =	ज + ती + ला =
अ + च + क + ने =	ख + ती + र =

Worksheet 1Subject: MathsClass: I

Name: _____

Q1) Circle the biggest number.**Q2) Circle the smallest number.****Q3) Count the objects and compare using symbols $>$, $<$ or $=$.**

Q4) Put the sign $>$, $<$ or $=$.

1. $2 \bigcirc 6$

6. $4 \bigcirc 20$

2. $8 \bigcirc 2$

7. $16 \bigcirc 12$

3. $17 \bigcirc 14$

8. $18 \bigcirc 19$

4. $10 \bigcirc 9$

9. $6 \bigcirc 5$

5. $1 \bigcirc 11$

10. $3 \bigcirc 13$

Q5) Arrange the numbers in descending order - (Biggest to Smallest)

7	5	8	2

23	10	34	42

15	12	18	16

26	44	39	12

Q6) Fill in the blanks:-

a) $2 \times 6 = \underline{\hspace{2cm}}$

b) $2 \times 9 = \underline{\hspace{2cm}}$

c) $2 \times 2 = \underline{\hspace{2cm}}$

d) $2 \times 4 = \underline{\hspace{2cm}}$

e) $2 \times 5 = \underline{\hspace{2cm}}$


Q7) Fill in the blanks with the missing numbers:-

31, _____, 33, _____, 35, _____

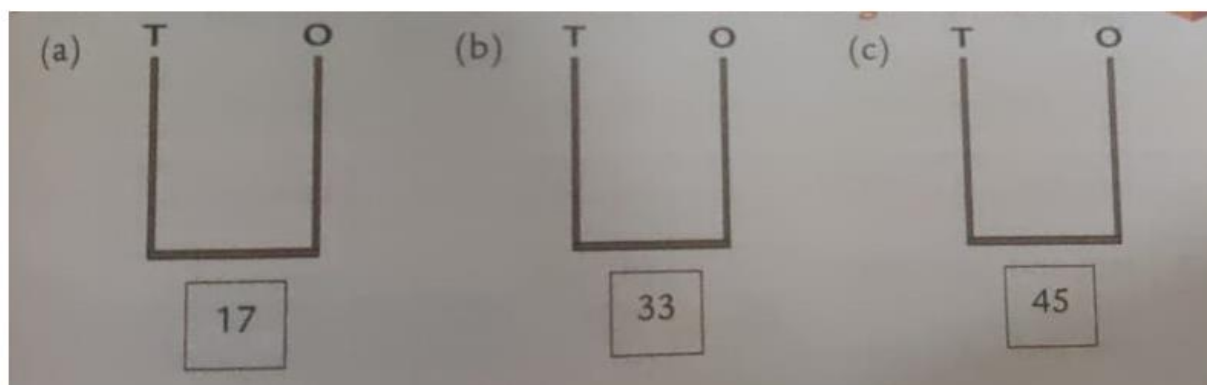
27, _____, _____, 30

39, _____, 41, _____, _____, 44

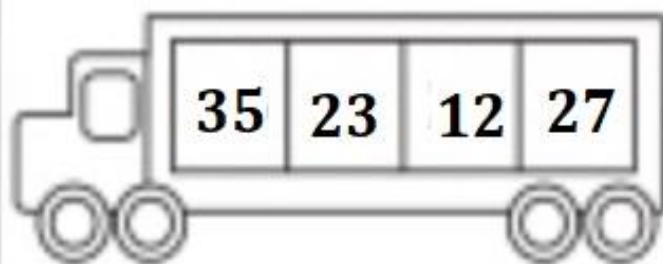
Q8) Write numbers in the boxes to match the number of beads.



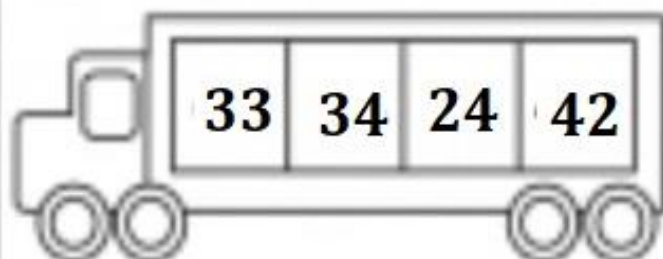
Q9) Draw beads on the abacus to match the numbers given in the boxes.



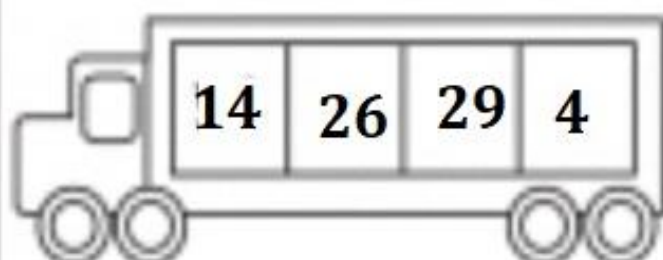
Q10) Arrange the numbers in ascending order. (Smallest to biggest)



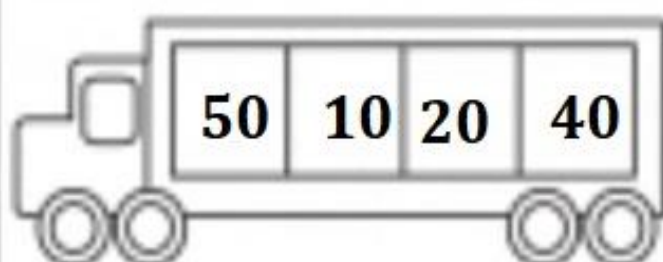
--	--	--	--



--	--	--	--



--	--	--	--



--	--	--	--

Worksheet 1**Subject: Environmental****Class I**

Name _____

Q1) Fill in the blanks with the given help box.**(body, water, hands, sense organs, digest)**

- 1) My _____ has many parts.
- 2) We use our _____ to know the world around us.
- 3) Water helps to _____ the food we eat.
- 4) We must drink six to eight glasses of _____ every day.
- 5) Wash your _____ before and after eating.

Q2) Write True or False for the following statements.

- 1) Our eyes help us to see. ()
- 2) Our tongue helps us to feel. ()
- 3) We eat three meals in a day. ()
- 4) We should chew our food with our mouth open. ()
- 5) We should never waste food. ()

6) Q3) Match the following

- | | |
|--------------|-----------|
| 1) Breakfast | afternoon |
| 2) Lunch | night |
| 3) Dinner | morning |

Q4) Identify the following as healthy food and junk food and put a (✓)

for healthy food and put a (×) for junk food.

1.



3.



5.




2.



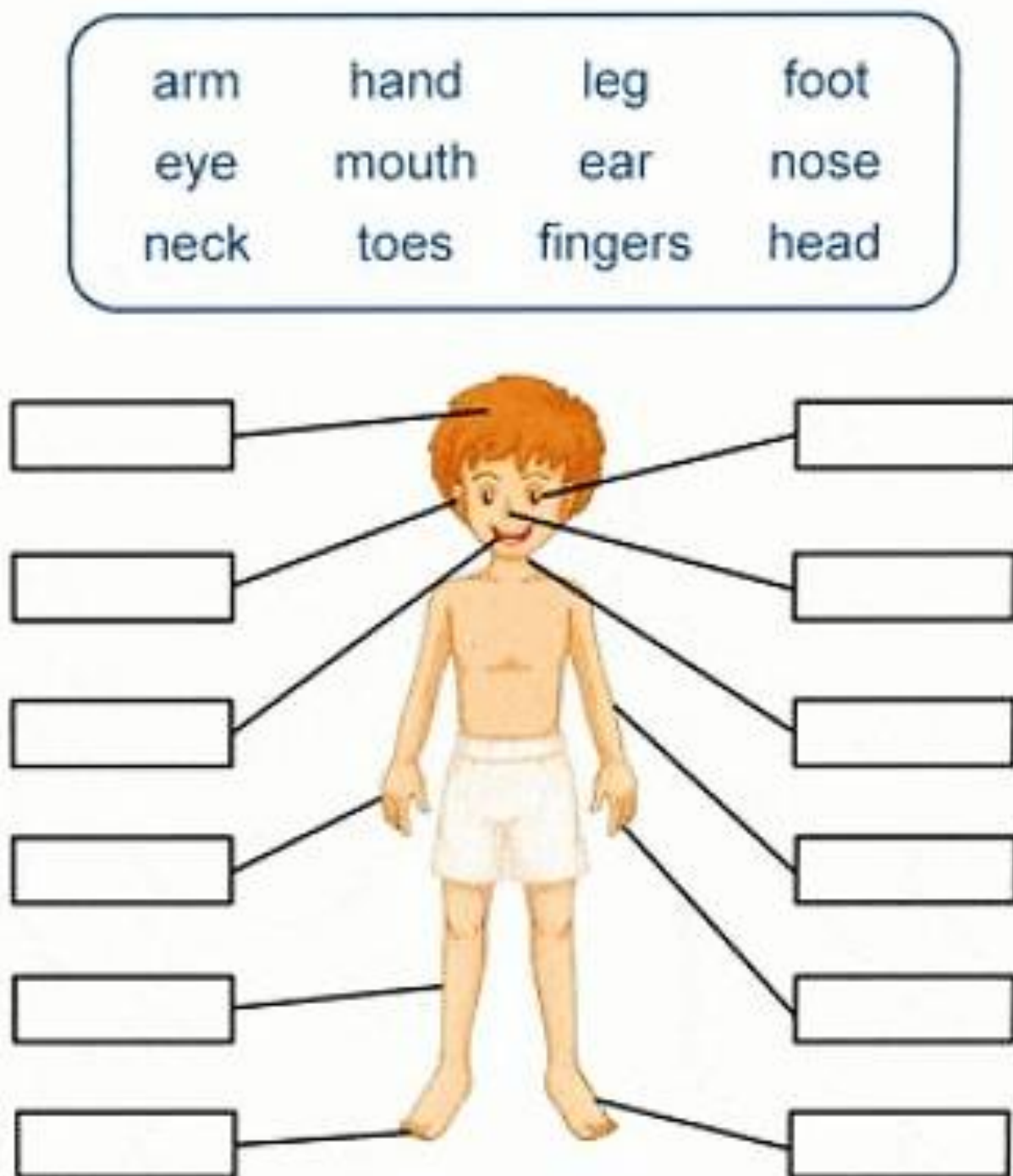
4.



6.



Q5) Label the parts of the body below:



Worksheet 1**Subject: Computer****Class: I****Name:** _____**Q1. Fill in the blanks: -**

- a) A computer works very _____.
- b) Machines make our work _____.
- c) A _____ is a man-made thing.
- d) A computer is a _____.
- e) We work on _____ machines using our hands or feet.

Q2. Write T for True and F for False: -

- a) Some machines run on fuel. ()
- b) A computer gets tired quickly. ()
- c) A laptop is easier to carry than a desktop. ()
- d) A computer is not a machine. ()
- e) Machines waste our time. ()

Q3. Answer the following questions: -

- a) **Write the names of any two machines that run on electricity.**

- b) **Write the names of any two machines that run on fuel.**

Worksheet 1**Subject: General Knowledge****Class: I**

Name: _____

- 1. Name the national flower of India.**
- 2. What is the place where books are kept?**
- 3. What is the capital of India?**
- 4. In which season do we wear sweater?**
- 5. Name the national bird of India.**
- 6. Who is the current Prime Minister of India?**
- 7. What is the name of your school?**
- 8. Which part of the body help us to walk?**
- 9. Which part of the body help us to taste things?**
- 10. Name five sense organs.**
- 11. Which sense organ tells us that door bell is ringing?**
- 12. What three things can we do with our hands?**
- 13. We watch cartoons with our _____ .**
- 14. Which type of food should we eat to stay fit?**
- 15. Name two seedless fruits.**
- 16. Name two green leafy vegetables.**
- 17. Who is known as the ‘father of computers’?**
- 18. Which is the largest organ in our body?**
- 19. Name the largest land animal on the earth.**
- 20. Name the tallest animal on the earth.**
- 21. Who am I? Name them.**
 - a) I am the king of all the animals.**

- b) I run very fast.**
- c) I am the king of all the fruits.**

22. Name three magic words.

23. Which is the national sport of India?

24. Name two indoor games.

25. How many colours are there in a rainbow?

Answers:-

- 1. Lotus**
- 2. Library**
- 3. New Delhi**
- 4. Winters**
- 5. Peacock**
- 6. Mr. Narendra Modi**
- 7. Guru Tegh Bahadur 3rd Centenary Public School**
- 8. Legs**
- 9. Tongue**
- 10. Eyes, Ears, Nose, Tongue, Skin**
- 11. Ears**
- 12. Hold things, write and clap**
- 13. Eyes**
- 14. Healthy food**
- 15. Pineapple and Banana**
- 16. Spinach and Cabbage**
- 17. Charles Babbage**
- 18. Skin**
- 19. Elephant**
- 20. Giraffe**
- 21. a) Lion**

b) Deer

c) Mango

22. Thank you, Sorry and Please

23. Hockey

24. Ludo and Chess

25. Seven

Worksheet 2**Subject: English Class: I****Name:** _____

Q1. Write the opposite of the words given below.

1) sad - _____

2) cold - _____

3) tall - _____

4) near- _____

5) fat- _____

6) day- _____

7) high- _____

8) out- _____

Q2. Write the plural form of the following words given in the bracket.

1) The _____ (cat) are running.



2) Fill all these _____ (bottle).



3) Colour all the _____ (tree) green.



4) Read all the _____ (page).



5) Keep your _____ (book) clean.



6) Write the _____ (word) neatly.

7) Wash all the _____ (car).



8) Give me some _____(pencil).



9) Fill in the _____(blank)

10) There are three _____(bird).



Q3. Circle the correct rhyming word for the given word.

1) boat- goat, look

2) fun – car, bun

3) fox -fly, box

4) rose- nose, make

5) mat- sad, cat

6) bake- cake, bike

7) look- cook, take

Q4. Write five sentences on My Favourite Fruit .

1) _____

2) _____

3) _____

4) _____

5) _____

LITERATURE

Answer the following questions (Refer: Lesson: The Mango Tree)

Q1. Where are the children playing?

Ans1. _____

Q2. Name the four children in the story.

Ans2. _____

Q3. What do Payal and Lila enjoy?

Ans3. _____

Q4. Why do the children dig a hole ?

Ans4. _____

Worksheet 2Subject: HindiClass: IName: _____

Page | 1



कार्य पत्रिका 2

विषय -- हिंदी

कक्षा -- प्रथम

नाम _____ कक्षा वर्ग _____ दिनांक _____

प्रश्न 1: नीचे दिए चित्रों को देखकर नाम लिखो:



प्रश्न 2: शब्द लिख कर वाक्य पूरे करो



सलमा

खा। नगमा



पहन।



बरखा

पकड़। रचना



मत बजा।



राम _____ जला



रमन अपना _____ पकड़

प्रश्न 3: फलों के नाम लिखो

1

4

2

5

3

6

प्रश्न 4: चित्रों का मिलान करो:



टिकट



सितार




विमान



दिमाग



किशमिश



मकड़ी



कली



चाबी



दिन



बकरी

प्रश्न 5 : आ ,इ, ई की सही मात्रा लगाओ

आरति _____	अम _____	इमालि _____
कीशमिश _____	अश्रम _____	नदि _____
ततल _____	चन _____	वीमन _____
गटार _____	किसन _____	असन _____
मछलि _____	गीलहरी _____	मठाई _____
खिरा _____	किताब _____	चिड़ीया _____
हीरन _____	हथ _____	गीलस _____

प्रश्न 6: नीचे दिए शब्दों से वाक्य बनाओ:

पपीता -----

माला -----

गिटार -----

मकड़ी -----

मिठाई -----

प्रश्न 7: नीचे दिए शब्दों सही मात्रा में लिखें

लाल, किसान , बिल , मछली, रात, बकरी, दिल, आफत, लिहाफ दादी, टिकट, आप ,
लड़की, बरखा, गिटार , पानी ,

आ -----

इ -----

ई -----

Assignment: 1

Subject: EVS




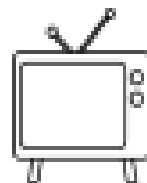


Class: I

Name: _____ Class & Sec. _____ Roll No. _____ Date: _____

Q1. Fill in the blanks

1. Our _____ helps us to smell.
2. Our eyes help us to _____.
3. Our _____ help us to hear.
4. Our _____ help us to feel.

Q2. Match



Worksheet 2**Subject: Maths****Class: I****Name:** _____**Q1) a) What comes after?**

- 1) 32 _____
- 2) 35 _____
- 3) 16 _____
- 4) 29 _____
- 5) 10 _____

b) What comes before?

- 1) _____ 31
- 2) _____ 43
- 3) _____ 20
- 4) _____ 11
- 5) _____ 50

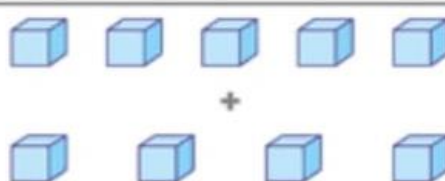
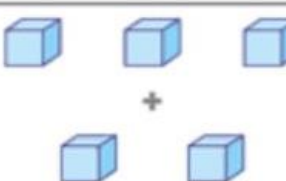
c) What comes in between?

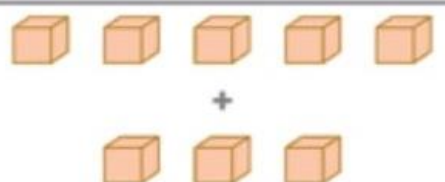
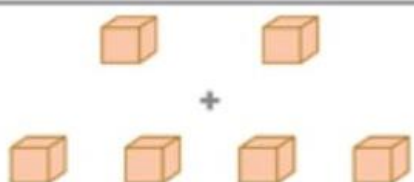
- 1) 48 _____ 50
- 2) 37 _____ 39
- 3) 13 _____ 15
- 4) 21 _____ 23
- 5) 29 _____ 31

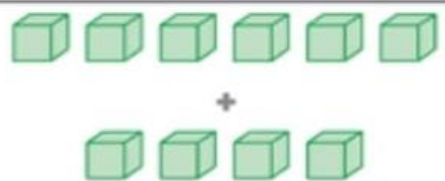
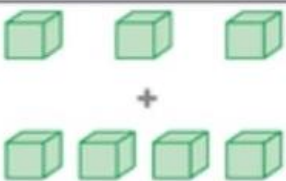
Q2) Write the number names of the following numbers

- a) 10- _____
- b) 7 - _____
- c) 18- _____
- d) 14- _____
- e) 9- _____
- f) 20- _____
- g) 11- _____

Q3) Add and write the correct number of objects

 $5 + 4 = \dots\dots$	 $3 + 2 = \dots\dots$
---	--

 $5 + 3 = \dots\dots$	 $2 + 4 = \dots\dots$
---	--

 $6 + 4 = \dots\dots$	 $3 + 4 = \dots\dots$
--	---

Q4) Add the following

<p>1. $\begin{array}{r} 4 \\ + 2 \\ \hline \end{array}$</p>	<p>2. $\begin{array}{r} 6 \\ + 1 \\ \hline \end{array}$</p>
<p>3. $\begin{array}{r} 5 \\ + 2 \\ \hline \end{array}$</p>	<p>4. $\begin{array}{r} 3 \\ + 3 \\ \hline \end{array}$</p>

Q5) Fill in the blanks

1) $2+5=$ _____ so $5+2=$ _____

2) $3+1=$ _____ so $1+3=$ _____

3) $8+0=$ _____ so $0+8=$ _____

4) $4+5 = \underline{\hspace{2cm}}$ so $5+4 = \underline{\hspace{2cm}}$

5) $5+2 = \underline{\hspace{2cm}}$ so $2+5 = \underline{\hspace{2cm}}$

Q6) Add

1) $\begin{array}{r} 8 \\ + 1 \\ \hline \end{array}$

2) $\begin{array}{r} 4 \\ + 1 \\ \hline \end{array}$

3) $\begin{array}{r} 3 \\ + 2 \\ \hline \end{array}$

4) $\begin{array}{r} 6 \\ + 3 \\ \hline \end{array}$

5) $\begin{array}{r} 3 \\ + 4 \\ \hline \end{array}$

6) $\begin{array}{r} 3 \\ + 1 \\ \hline \end{array}$

Q7) Add

- a) Tom has 3 yellow pencils and 2 red pencils. How many pencils does he have?



+

=

- b) There are 4 roses and 2 sunflowers in my garden. How many flowers are there in all?



+

=

- c) 5 boys were playing in the playground. 3 girls also join in. How many kids are there?



+

=

Worksheet 2**Subject: Environmental Studies****Class: I****Name:** _____**Q1) Fill in the blanks with the given help box.****(summer, clothes, woollen, exercise, rest)**

6) We wear cotton clothes in _____.

7) _____ clothes keep us warm.

8) _____ comes from plants and animals.

9) We must _____ when we feel tired.

10) We must _____ every day.

Q2) Match the following.

a) Summer Seas



b) Winter Seaso



c) Rainy Season

Q3) Write True or False for the following statements.

1) Cotton clothes keep us cool in summer. ()


2) We get wool from cotton plant. ()

3) We should use a clean towel to wipe ourselves. ()

4) We must rest for eight hours every night. ()

5) We must not eat healthy food. ()

Q4) Fill in the blanks with the help of given pictures.

Personal Hygiene Products	
1. I dry my hands with a _____.	
2. I use _____ in the restroom.	
3. I comb my hair with a _____.	
4. I use a _____ to see me.	
5. I put _____ on my toothbrush.	
6. I wash my hair with _____.	
7. I brush my teeth with a _____.	
8. I clean my body with a _____.	

